

姓名：\_\_\_\_\_

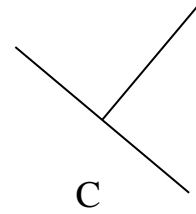
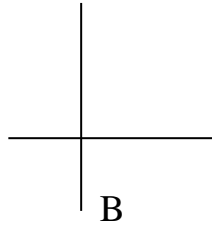
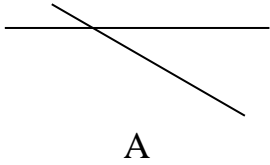
班別：\_\_\_\_\_ ( )

日期：\_\_\_\_\_

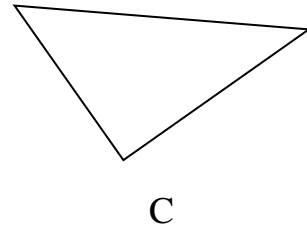
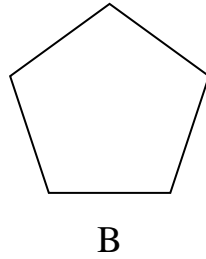
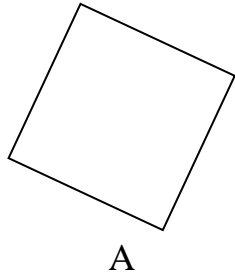
總分：\_\_\_\_\_

把答案填在橫線上。

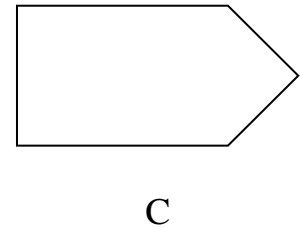
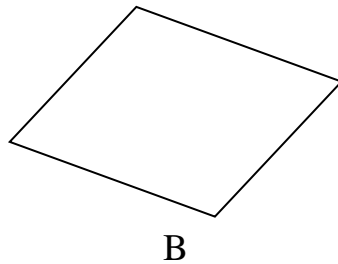
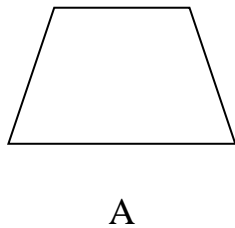
① 以下哪組直線是垂直線？

答案：\_\_\_\_\_ **B, C** \_\_\_\_\_

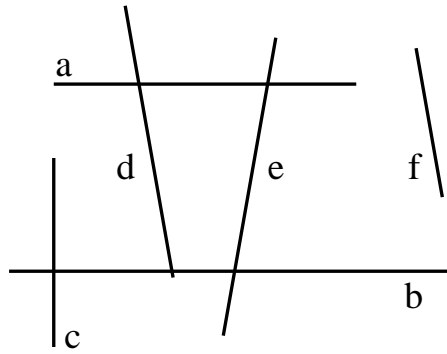
② 以下哪些圖形包含垂直線？

答案：\_\_\_\_\_ **A, C** \_\_\_\_\_

③ 以下哪些圖形包含垂直線和平行線？

答案：\_\_\_\_\_ **C** \_\_\_\_\_

④



(a) 上圖中，直線 b 和直線 c 是一組垂直線。

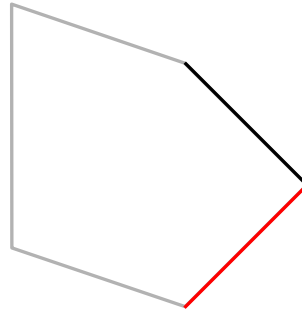
(b) 上圖中，共有 2 組平行線。直線 a 與直線 b，直線 d 與直線 f

在以下各題中，把與黑線組成垂直線的線塗色。

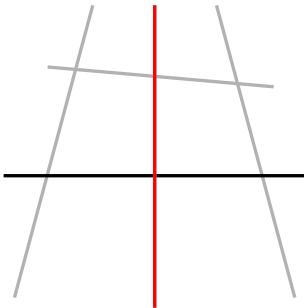
~~⑤~~




~~⑥~~



⑦

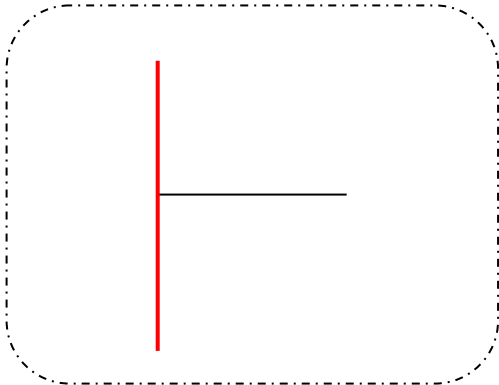


⑧



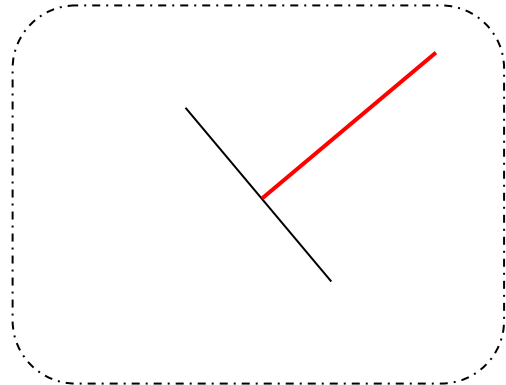
在以下各題中，利用直尺來協助繪畫一條與黑線組成垂直線的線。

⑨



可有其他答案。

⑩



可有其他答案。